

Year 1 Maths Activity Mat: Autumn 1

2


Section 1

Double these numbers.

2 → 3 →

Section 4

There are 2 pink fish and 2 blue fish.
How many fish are there altogether?



Section 5

Put a circle around the odd numbers.

1 3
4 2 5

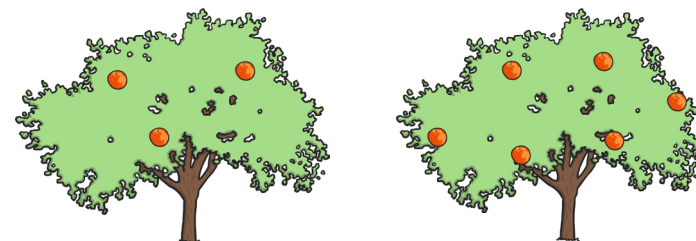
Section 2

Add the coins.



Section 6

Tick the tree with the fewest apples.



Section 3

Count back. Fill in the missing numbers.



Section 7


1 less than 7 is →

1 less than 5 is →

1 less than 9 is →

Section 8

Add 1 more bottle.
How many bottles are there now?




Section 1

Double these numbers.

2 → 3 →

Section 4

There are 2 pink fish and 2 blue fish.
How many fish are there altogether?



Section 5

Put a circle around the odd numbers.



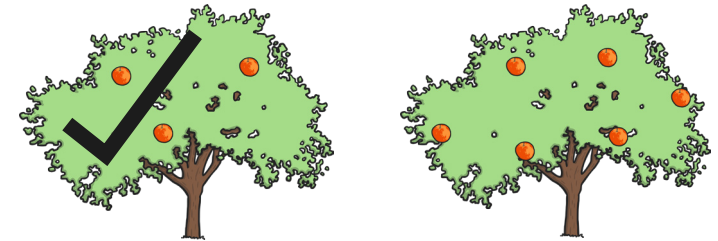
Section 2

Add the coins.



Section 6

Tick the tree with the fewest apples.



Section 3

Count back. Fill in the missing numbers.



Section 7

1 less than 7 is →


1 less than 5 is →

1 less than 9 is →

Section 8

Add 1 more bottle.

How many bottles are there now?



Year 1 Maths Activity Mat: Autumn 1

2


Section 1

Double these numbers.

8 → 6 →

Section 4

There are 5 pink fish and 6 blue fish.
How many fish are there altogether?



Section 5

Put a circle around the odd numbers.

8 10
11 9 12



Section 2

Add the coins.



Section 6

Tick the tree with the fewest apples.



Section 3

Count back. Fill in the missing numbers.



Section 7


1 less than 14 is →

1 less than 15 is →

1 less than 17 is →

Section 8

Add 1 more bottle.
How many bottles are there now?




Section 1

Double these numbers.

8 → 6 →

Section 4

There are 5 pink fish and 6 blue fish.
How many fish are there altogether?



Section 5

Put a circle around the odd numbers.

8 10
 12


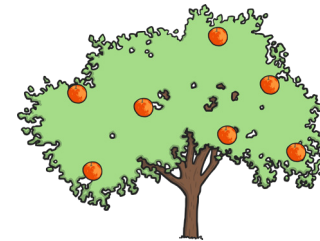
Section 2

Add the coins.



Section 6

Tick the tree with the fewest apples.



Section 3

Count back. Fill in the missing numbers.



Section 7

1 less than 14 is →


1 less than 15 is →

1 less than 17 is →

Section 8

Add 1 more bottle.

How many bottles are there now?



Year 1 Maths Activity Mat: Autumn 1

2


Section 1

Double these numbers.

10 → 7 → 9 →

Section 4

There are 8 pink fish and 9 blue fish.
How many fish are there altogether?



Section 5

Put a circle around the odd numbers.

13 15
16 14 17


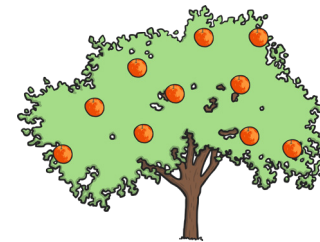
Section 2

Add the coins.




Section 6

Tick the tree with the fewest apples.



Section 3

Count back. Fill in the missing numbers.



Section 7

1 less than 19 is →


1 less than 17 is →

1 less than 13 is →

Section 8

Add 1 more bottle.

How many bottles are there now?




Section 1

Double these numbers.

10 → 20 7 → 14 9 → 18

Section 4

There are 8 pink fish and 9 blue fish.
How many fish are there altogether?



17

Section 5

Put a circle around the odd numbers.

16 13 14 15 17

Section 2



Add the coins.



21p

Section 6

Tick the tree with the fewest apples.



Section 3

Count back. Fill in the missing numbers.



Section 7

1 less than 19 is → 18


1 less than 17 is → 16

1 less than 13 is → 12

Section 8

Add 1 more bottle.

How many bottles are there now?



11